

Write your name here

Surname

Other names

**Pearson Edexcel**  
**International**  
**Advanced Level**

Centre Number

--	--	--	--	--

Candidate Number

--	--	--	--

# Core Mathematics C34

## Advanced

Tuesday 19 June 2018 – Afternoon

**Time: 2 hours 30 minutes**

Paper Reference

**WMA02/01****You must have:**

Mathematical Formulae and Statistical Tables (Blue)

Total Marks

--

**Candidates may use any calculator allowed by the regulations of the Joint Council for Qualifications. Calculators must not have the facility for symbolic algebra manipulation, differentiation and integration, or have retrievable mathematical formulae stored in them.**

**Instructions**

- Use **black** ink or ball-point pen.
- If pencil is used for diagrams/sketches/graphs it must be dark (HB or B). Coloured pencils and highlighter pens must not be used.
- **Fill in the boxes** at the top of this page with your name, centre number and candidate number.
- Answer **all** questions and ensure that your answers to parts of questions are clearly labelled.
- Answer the questions in the spaces provided – *there may be more space than you need.*
- You should show sufficient working to make your methods clear. Answers without working may not gain full credit.
- When a calculator is used, the answer should be given to an appropriate degree of accuracy.

**Information**

- The total mark for this paper is 125.
- The marks for **each** question are shown in brackets – *use this as a guide as to how much time to spend on each question.*

**Advice**

- Read each question carefully before you start to answer it.
- Try to answer every question.
- Check your answers if you have time at the end.

Turn over ►

P50803A

©2018 Pearson Education Ltd.

1/1/1/



Pearson



























5. (i) The functions  $f$  and  $g$  are defined by

$$f : x \rightarrow e^{2x} - 5, \quad x \in \mathbb{R}$$

$$g : x \rightarrow \ln(3x - 1), \quad x \in \mathbb{R}, x > \frac{1}{3}$$

- (a) Find  $f^{-1}$  and state its domain.

(3)

- (b) Find  $fg(3)$ , giving your answer in its simplest form.

(2)

- (ii) (a) Sketch the graph with equation

$$y = |4x - a|$$

where  $a$  is a positive constant. State the coordinates of each point where the graph cuts or meets the coordinate axes.

(2)

Given that

$$|4x - a| = 9a$$

where  $a$  is a positive constant,

- (b) find the possible values of

$$|x - 6a| + 3|x|$$

giving your answers, in terms of  $a$ , in their simplest form.

(5)

---

---

---

---

---

---

---

---

---

---

---

---

---

---

---

---

---

---

---

---

---

---

---

---

---

DO NOT WRITE IN THIS AREA

DO NOT WRITE IN THIS AREA

DO NOT WRITE IN THIS AREA

































9.

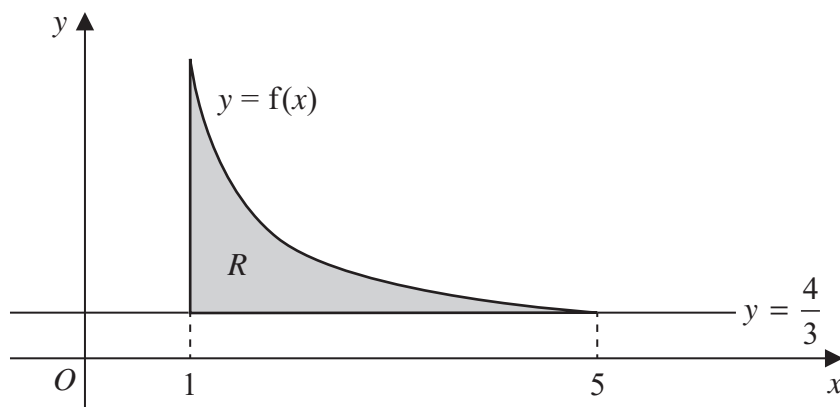
Diagram not  
drawn to scale

Figure 2

(a) Find

$$\int \frac{1}{(2x-1)^2} dx$$

(2)

Figure 2 shows a sketch of the curve with equation  $y = f(x)$  where

$$f(x) = \frac{12}{(2x-1)^2} \quad 1 \leq x \leq 5$$

The finite region  $R$ , shown shaded in Figure 2, is bounded by the line with equation  $x = 1$ , the curve with equation  $y = f(x)$  and the line with equation  $y = \frac{4}{3}$ .

The region  $R$  is rotated through  $2\pi$  radians about the  $x$ -axis to form a solid of revolution.

(b) Find the exact value of the volume of the solid generated, giving your answer in its simplest form.

(6)

---

---

---

---

---

---

---

---

---

---

---

---

---

---

---

---

---

---

---

---

---

---

---

---

DO NOT WRITE IN THIS AREA

DO NOT WRITE IN THIS AREA

DO NOT WRITE IN THIS AREA



















11.

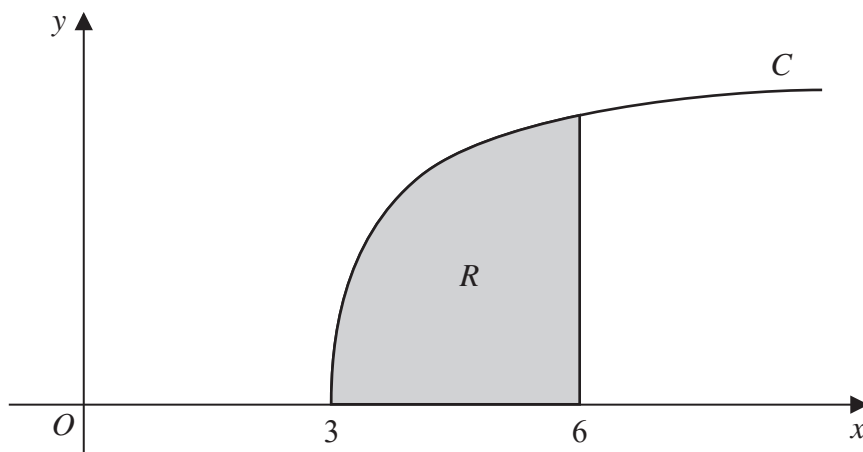


Figure 3

- (a) By writing  $\sec \theta$  as  $\frac{1}{\cos \theta}$ , show that when  $x = 3 \sec \theta$ ,

$$\frac{dx}{d\theta} = 3 \sec \theta \tan \theta \quad (2)$$

Figure 3 shows a sketch of part of the curve  $C$  with equation

$$y = \frac{\sqrt{x^2 - 9}}{x} \quad x \geq 3$$

The finite region  $R$ , shown shaded in Figure 3, is bounded by the curve  $C$ , the  $x$ -axis and the line with equation  $x = 6$

- (b) Use the substitution  $x = 3 \sec \theta$  to find the exact value of the area of  $R$ .  
[Solutions based entirely on graphical or numerical methods are not acceptable.] (7)

---

---

---

---

---

---

---

---

---

---

---

---

---

---

---

---

---

---

---

---

---

---

---

---















Leave blank

Question 12 continued

Lined writing area for the answer to Question 12.

DO NOT WRITE IN THIS AREA

DO NOT WRITE IN THIS AREA

DO NOT WRITE IN THIS AREA



Leave  
blank

**Question 12 continued**

DO NOT WRITE IN THIS AREA

DO NOT WRITE IN THIS AREA

DO NOT WRITE IN THIS AREA

Q12

**(Total 9 marks)**



Leave  
blank

13. (a) Express  $\frac{1}{(4-x)(2-x)}$  in partial fractions. (2)

The mass,  $x$  grams, of a substance at time  $t$  seconds after a chemical reaction starts is modelled by the differential equation

$$\frac{dx}{dt} = k(4-x)(2-x), \quad t \geq 0, 0 \leq x < 2$$

where  $k$  is a constant.

Given that when  $t = 0$ ,  $x = 0$

(b) solve the differential equation and show that the solution can be written as

$$x = \frac{4 - 4e^{2kt}}{1 - 2e^{2kt}} \quad (7)$$

Given that  $k = 0.1$

(c) find the value of  $t$  when  $x = 1$ , giving your answer, in seconds, to 3 significant figures. (2)

---

---

---

---

---

---

---

---

---

---

---

---

---

---

---

---

---

---

---

---

---

---

---

---

---

---

DO NOT WRITE IN THIS AREA

DO NOT WRITE IN THIS AREA

DO NOT WRITE IN THIS AREA









14. Given that

$$y = \frac{(x^2 - 4)^{\frac{1}{2}}}{x^3} \quad x > 2$$

(a) show that

$$\frac{dy}{dx} = \frac{Ax^2 + 12}{x^4(x^2 - 4)^{\frac{1}{2}}} \quad x > 2$$

where  $A$  is a constant to be found.

(6)

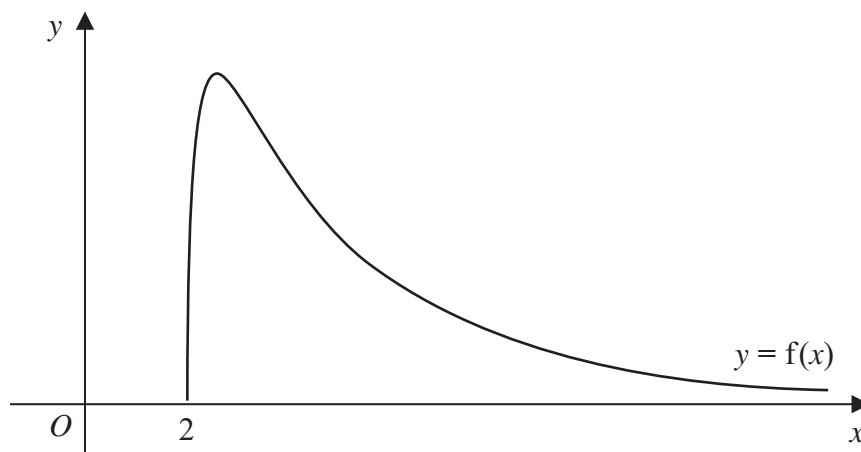


Figure 4

Figure 4 shows a sketch of part of the curve with equation  $y = f(x)$  where

$$f(x) = \frac{24(x^2 - 4)^{\frac{1}{2}}}{x^3} \quad x > 2$$

(b) Use your answer to part (a) to find the range of  $f$ .

(5)

(c) State a reason why  $f^{-1}$  does not exist.

(1)

---

---

---

---

---

---

---

---

---

---

DO NOT WRITE IN THIS AREA

DO NOT WRITE IN THIS AREA

DO NOT WRITE IN THIS AREA











